

# Arranging bricks

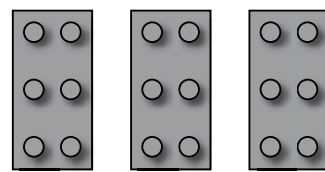

Annie, Bella and Cameron are fitting Lego bricks onto different sized rectangles.

Annie has 3 bricks.

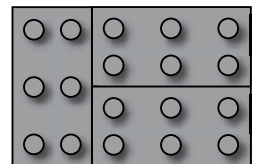


Bella has 4 bricks.

Cameron has 5 bricks.

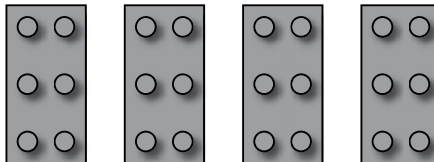
Annie's rectangle is this shape



She works out that there are only three ways to arrange her 3 bricks.



1) What different ways could Bella arrange her 4 bricks?



2) What different ways could Cameron arrange his 5 bricks?

